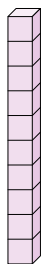


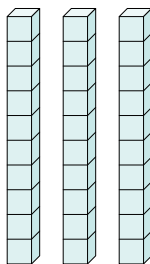


Determine the quantity of groups of ten. Then find the total number of smaller blocks.

Ex)



1)



Answers

Ex. 1 10

1. _____

2. _____

3. _____

4. _____

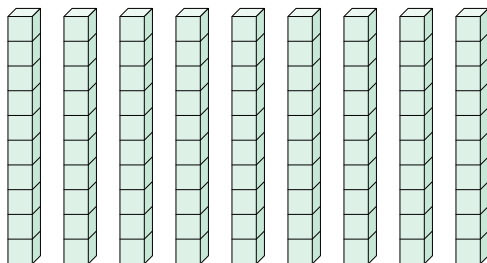
5. _____

6. _____

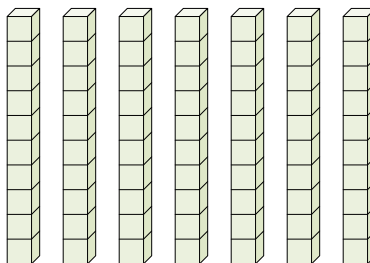
7. _____

8. _____

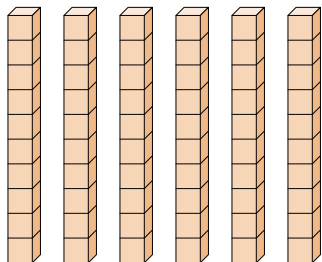
2)



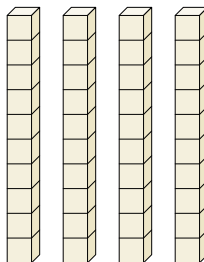
3)



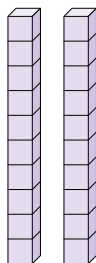
4)



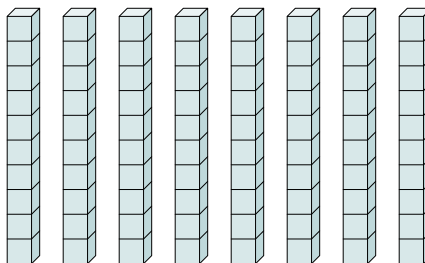
5)




6)



7)



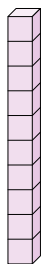
8)



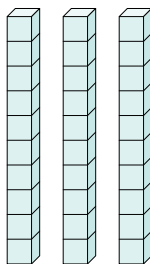


Determine the quantity of groups of ten. Then find the total number of smaller blocks.

Ex)



1)



Answers

Ex. 1 10

1. 3 30

2. 9 90

3. 7 70

4. 6 60


5. 4 40

6. 2 20

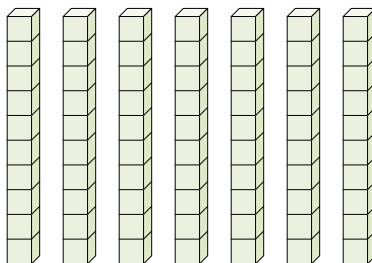
7. 8 80

8. 5 50

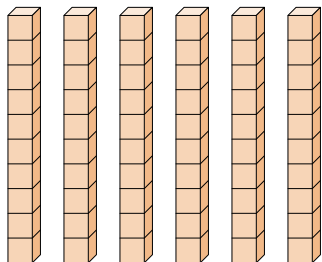
2)



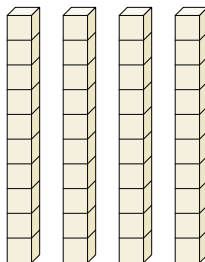
3)



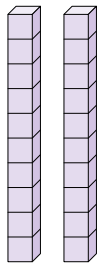
4)



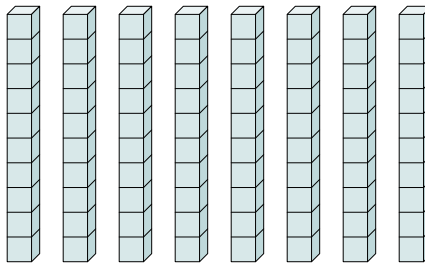
5)



6)



7)



8)

